

Hawk Signposts 17



Super Scriptwriters

It's almost the Easter holidays – two whole weeks without me setting you any work! Your task for today is to write a persuasive letter convincing your parents that you deserve an Easter egg (or other Easter treat) this year.

Success Criteria:

- Use modal verbs;
- Use emotive language;
- Use rhetorical questions

¡Feliz Pascua!

Happy Easter! Easter week is one of the most important times of year in the Spanish calendar. For today's creative learning, Mrs Millington would like you to each create a poster or leaflet about how Easter is celebrated in Spain, Portugal or a Latin-American country of your choice.

Have fun and be creative – I can't wait to show Mrs Millington your amazing work!



Maths – See the problems on page 2 which are a mixture of arithmetic questions and problem-solving questions all based on things we've learned in class.


Complete your work on your google classroom account wherever possible and submit this to Miss Hill for marking. You can also send pictures of work you have done on paper, or photos of activities, to nhill@meldreth.cambs.sch.uk or over your starz account.

Arithmetic Questions

| | |
|-----|----------------------------------|
| 1) | 13.7×3.5 |
| 2) | $19 + 22 \times 3$ |
| 3) | $35\% \times 960$ |
| 4) | $\frac{1}{4} + \frac{7}{10}$ |
| 5) | $4^2 - 3^2$ |
| 6) | 428 divided by 6 |
| 7) | $0.37 + 0.046$ |
| 8) | $20\frac{4}{11} - 6\frac{1}{12}$ |
| 9) | $10,000 - 26$ |
| 10) | $1335 \div 15$ |

Reasoning Questions

A barrel contains 13 l 280 ml of water.

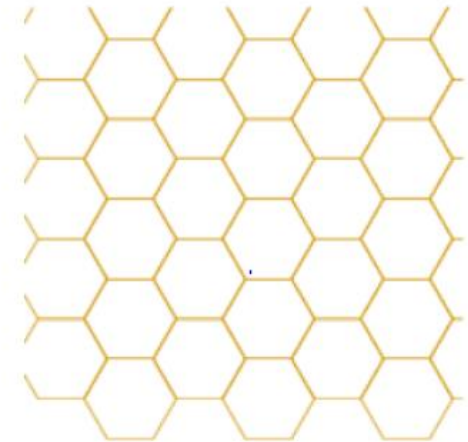


The water is shared equally between 5 buckets.

How much water is in each bucket?

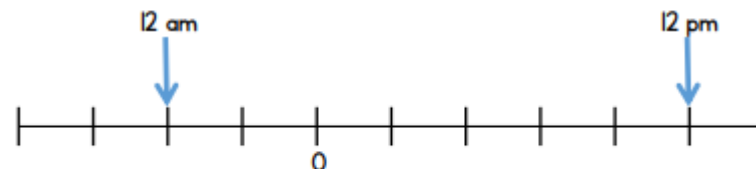
Each regular hexagon has a side length of 2 cm

Can you construct a shape with a perimeter of 44 cm?



The number line shows the temperature at 12 am and 12 pm on Monday in a town.


The difference between the temperatures is 14°C.



What is the temperature at 12pm?

A bag contains some lemons and pears.

For every 5 lemons there are 3 pears.



There are 18 more lemons than pears.

How many lemons are there in total?