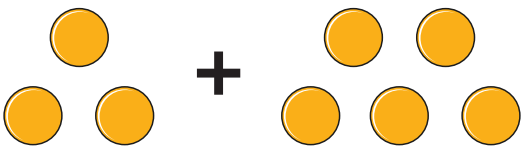


Add ones using number bonds

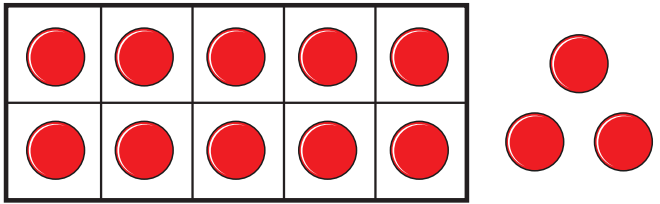
1 Complete the additions.

a)



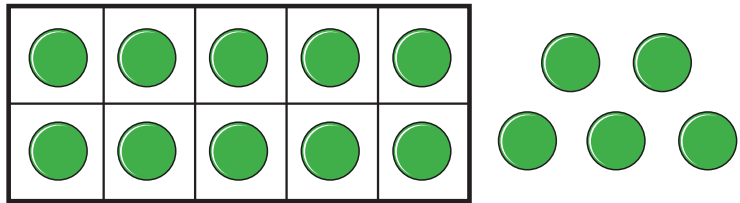
3 + 5 =

b)



13 + 5 =

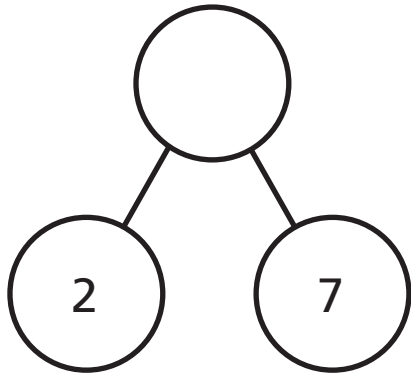
c)



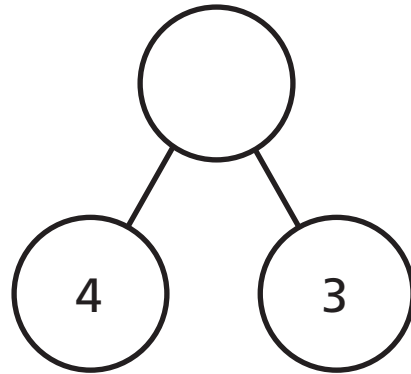
15 + 3 =

2 Complete the part-whole models.

a)



b)



3 Complete the additions.

a) $12 + 7 =$

$17 + 2 =$

$7 + 12 =$

$2 + 17 =$

b) $13 + 4 =$

$14 + 3 =$

$4 + 13 =$

$3 + 14 =$

4 Tick the additions that make 16

$14 + 2$

$15 + 2$

$10 + 6$

$1 + 16$

$3 + 13$

$12 + 5$

$11 + 5$

$1 + 15$

5 Complete the additions.

$\square + 5 = 9$

$\square + 2 = 9$

$8 + \square = 9$

$6 + \square = 9$

6 Complete the additions.

$\square + 5 = 19$

$\square + 2 = 19$

$18 + \square = 19$

$16 + \square = 19$